





# Multiply 2 Digits 1

4. Using the area model, circle the correct answer.

	40	3
30		
1		

- 1,663
- 1,333
- 2,193



VF  
HW/Ext

5. Lucy and Elijah have both worked out the calculation  $64 \times 62$  using the area model.




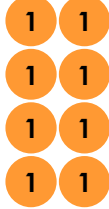
Lucy

I think the answer is 3,968.



Elijah

I think the answer is 3,668.





	60	2
60		
4		

Complete the model to find out who is correct.




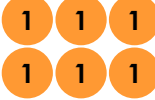


VF  
HW/Ext

6. Add counters to complete the area models and make the inequality symbol correct.

<



RPS  
HW/Ext